

Zwergen- und Riesenaufgaben



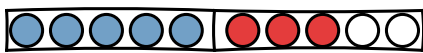
Schau dir alle 9 Lernvideos unter dem Link an.

Verstehst du, warum die großen Aufgaben mit diesem Trick ganz einfach zu rechnen sind?

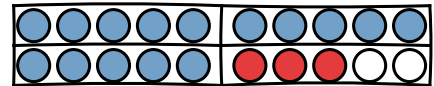
Löse anschließend folgende Aufgaben:



1



$$5 + 3 = \underline{\quad}$$

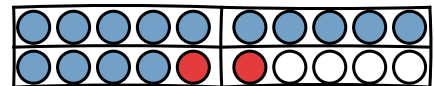


$$15 + 3 = \underline{\quad}$$

2



$$4 + 2 = \underline{\quad}$$

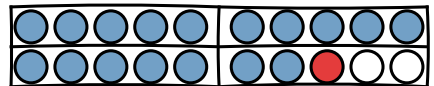



$$14 + 2 = \underline{\quad}$$

3



$$7 + 1 = \underline{\quad}$$

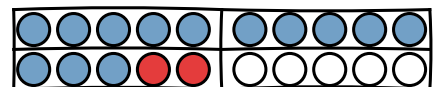



$$17 + 1 = \underline{\quad}$$

4



$$3 + 2 = \underline{\quad}$$

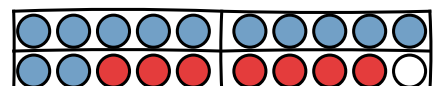


$$13 + 2 = \underline{\quad}$$

5



$$2 + 7 = \underline{\quad}$$

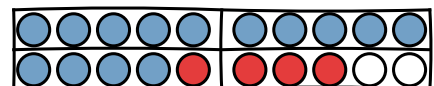


$$12 + 7 = \underline{\quad}$$

6



$$4 + 4 = \underline{\quad}$$



$$14 + 4 = \underline{\quad}$$

Zwergen- und Riesenaufgaben



Schau dir alle 9 Lernvideos unter dem Link an.

Verstehst du, warum die großen Aufgaben mit diesem Trick ganz einfach zu rechnen sind?

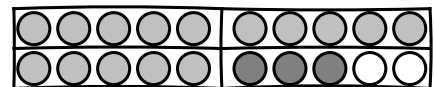
Löse anschließend folgende Aufgaben:



1



$$5 + 3 = \underline{\quad}$$

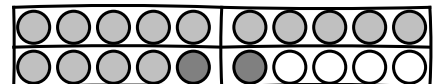


$$15 + 3 = \underline{\quad}$$

2



$$4 + 2 = \underline{\quad}$$

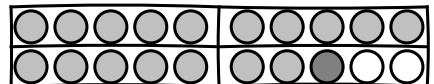



$$14 + 2 = \underline{\quad}$$

3



$$7 + 1 = \underline{\quad}$$

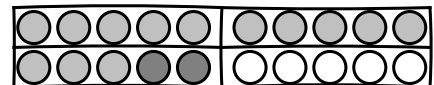



$$17 + 1 = \underline{\quad}$$

4



$$3 + 2 = \underline{\quad}$$

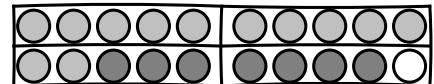


$$13 + 2 = \underline{\quad}$$

5



$$2 + 7 = \underline{\quad}$$

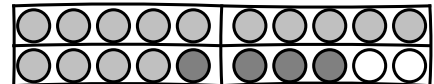


$$12 + 7 = \underline{\quad}$$

6



$$4 + 4 = \underline{\quad}$$



$$14 + 4 = \underline{\quad}$$