








Verliebte Zahlen



- 1 Verliebte Zahlen ergeben zusammen immer 10.
Fülle zuerst das 10er-Häuschen aus und trage dann den passenden Partner in die Herzen ein.

10	
0	
1	
2	
3	
4	
5	
6	
7	
8	
9	
10	



- 2 Löse die Rechenaufgaben. Die verliebten Zahlen helfen dir dabei.

$5 + 5 = \underline{\quad}$

$10 - 3 = \underline{\quad}$

$3 + 7 = \underline{\quad}$

$10 - 6 = \underline{\quad}$

$4 + 6 = \underline{\quad}$

$10 - 5 = \underline{\quad}$

$10 + 0 = \underline{\quad}$

$10 - 9 = \underline{\quad}$

$1 + 9 = \underline{\quad}$

$10 - 8 = \underline{\quad}$

$2 + 8 = \underline{\quad}$

$10 - 10 = \underline{\quad}$

Zum Schluss schau dir das Video zu den Verliebten Zahlen an und lerne den Refrain auswendig.
(Tipp: Handykamera)

