









Kleine und große Aufgaben



Wie heißen die kleinen Aufgaben? Schreibe sie auf!




 $\underline{\quad} + \underline{\quad} = \underline{\quad}$

 $14 + 5 = \underline{\quad}$




 $\underline{\quad} - \underline{\quad} = \underline{\quad}$

 $18 - 7 = \underline{\quad}$




 $\underline{\quad} - \underline{\quad} = \underline{\quad}$

 $13 - 1 = \underline{\quad}$




 $\underline{\quad} + \underline{\quad} = \underline{\quad}$

 $16 + 3 = \underline{\quad}$




 $\underline{\quad} + \underline{\quad} = \underline{\quad}$

 $11 + 8 = \underline{\quad}$




 $\underline{\quad} - \underline{\quad} = \underline{\quad}$

 $15 - 5 = \underline{\quad}$




 $\underline{\quad} - \underline{\quad} = \underline{\quad}$

 $16 - 4 = \underline{\quad}$




 $\underline{\quad} + \underline{\quad} = \underline{\quad}$

 $13 + 4 = \underline{\quad}$


 $\underline{\quad} + \underline{\quad} = \underline{\quad}$

 $12 + 6 = \underline{\quad}$


 $\underline{\quad} - \underline{\quad} = \underline{\quad}$

 $19 - 2 = \underline{\quad}$


 $\underline{\quad} - \underline{\quad} = \underline{\quad}$

 $15 - 1 = \underline{\quad}$


 $\underline{\quad} + \underline{\quad} = \underline{\quad}$

 $14 + 4 = \underline{\quad}$


 $\underline{\quad} - \underline{\quad} = \underline{\quad}$

 $17 - 3 = \underline{\quad}$

